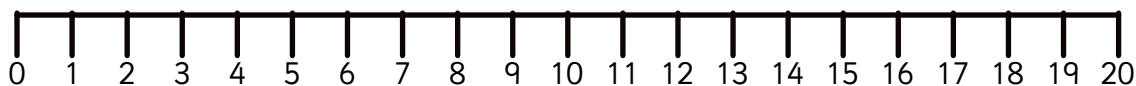


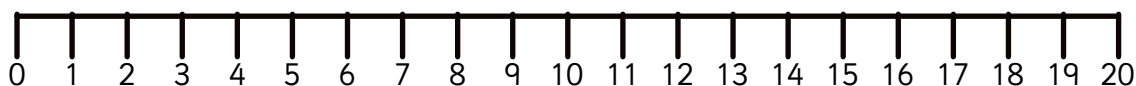
Year 1 Sample Arithmetic and Reasoning Materials – Paper 1

1 $8 + 5 =$



1 mark

2 $16 -$ $= 9$



1 mark

3 Jas has **8** badges.



She gives **3** to Max.

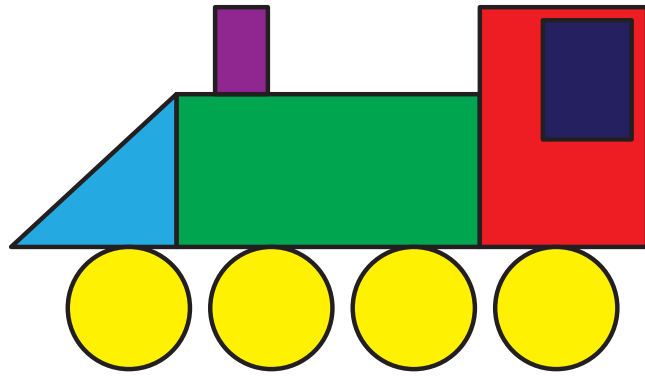
How many badges does Jas have left?

badges



1 mark

4



How many of each shape can you see?

Write the number in each box.

circles

rectangles

triangles



1 mark