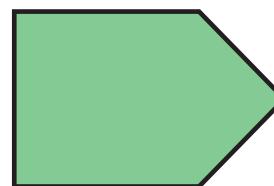
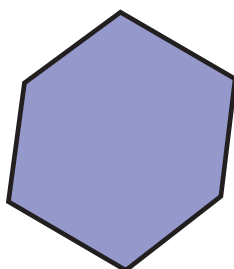






Year 2 Sample Reasoning Paper Materials

Question 1 is a sample aural question. The aural questions appear in the Teacher Guide. The other sample questions are not aurally administered.


The teacher reads: *Tick the **two** triangles.*

1 Tick (✓) **two**.






1 mark

2 Max has:



Tick (✓) the purse that has the **same** amount of money as Max.



1 mark

3



Zara, Tim and Emma blow **10** bubbles each.

How many bubbles do they blow **altogether**?

bubbles



1 mark

4 A family goes to the cinema.

They buy **1 adult**
and **2 child** tickets.

Tickets	
Adult	£5.00
Child	£2.00

They pay with a **£20** note.

How much change does the family get?

Show your working:

£

2 marks