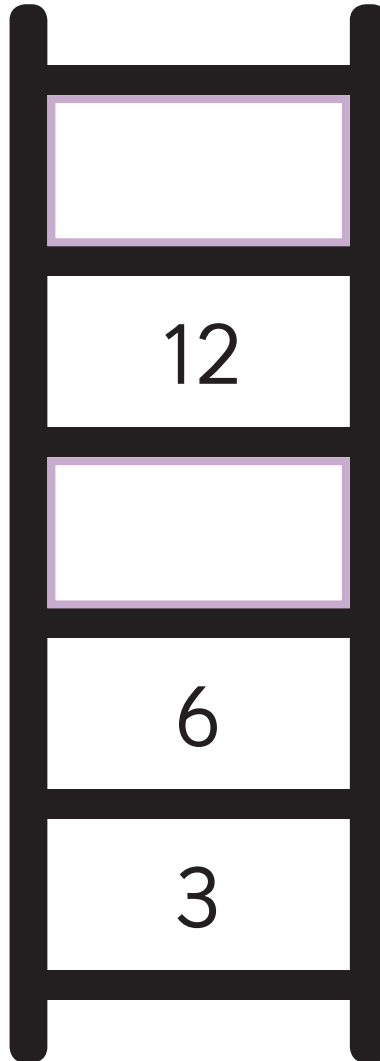


Year 2 Sample Arithmetic Paper Materials

- ① Count in **threes** to fill in the missing numbers.

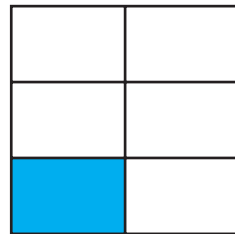

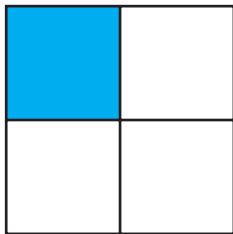


1 mark

2 $10 \times 7 =$

1 mark

3 Tick (✓) the picture that is $\frac{1}{4}$ blue.



1 mark

4 $28 - 13 =$

1 mark